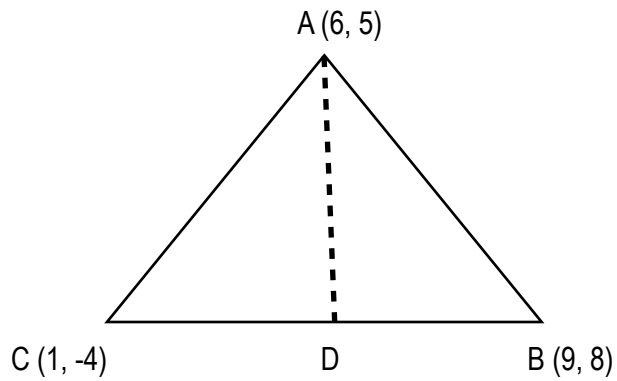


Mathematics 10
Class Assignment 5

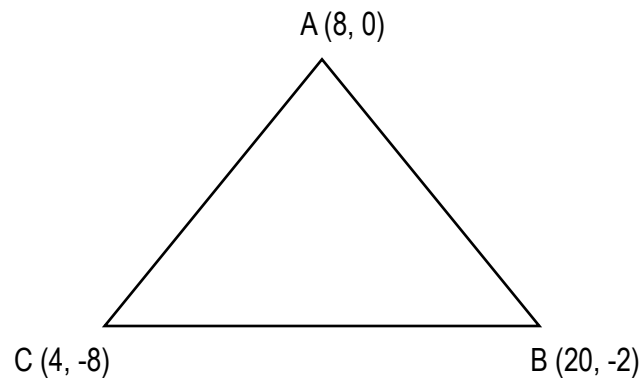
Name: _____

Total Marks: 20

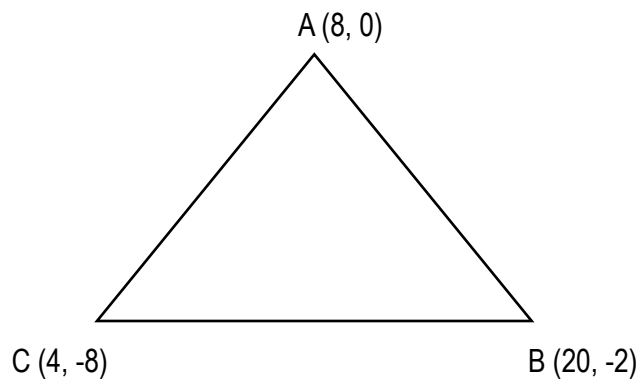
- 5 1. Write a linear equation for the median AD found on the following triangle:



- 5 2. Write a linear equation for the right bisector of AC found on the following triangle:



- 5 3. Write a linear equation for the altitude of vertex B found on the following triangle:



- 5 4. Verify that $\triangle ABC$ is a right-angle triangle.

